








$$3 + 7 =$$




$$7 + 3 =$$



$$\bigcirc 10 - 7 =$$



$$10 - 3 =$$




$$4 + 6 =$$



$$6 + 4 =$$



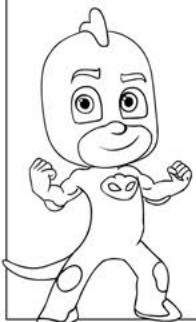
$$10 - 6 =$$




$$\bigcirc 10 - 4 =$$



$$5 + 5 =$$



$$10 - 5 =$$



10

10

7

3

10

10

6

4

5

10